

Mansoura University		Final Exam, Jan., 2015
Faculty of Engineering		Full Mark:50 & Full Time: 2 hrs
Specific Program (BME)		Engineering Drawings

Answer all the following questions (All dimensions are in mm)

**Question1: (20 Marks)**

Use your own divider to get the dimensions of the Isometric shown in figure (1), and then draw it with a suitable scale.

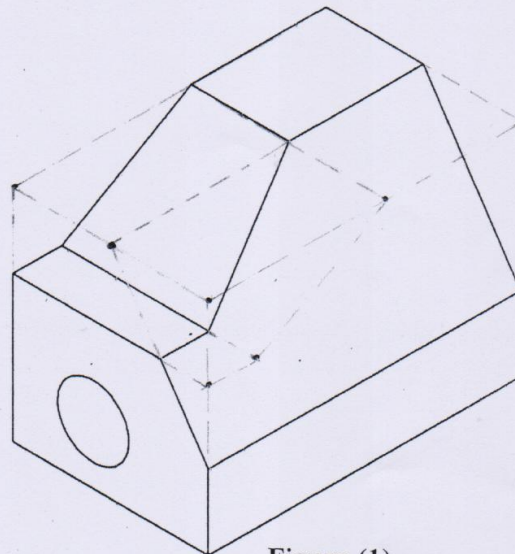


Figure (1)

**Question2: (30 Marks)**

For figure (2), draw the followings:

1. Sectional Front at Z - Z
2. Sectional Plan at Q - Q
3. Side view to be drawn to the right.

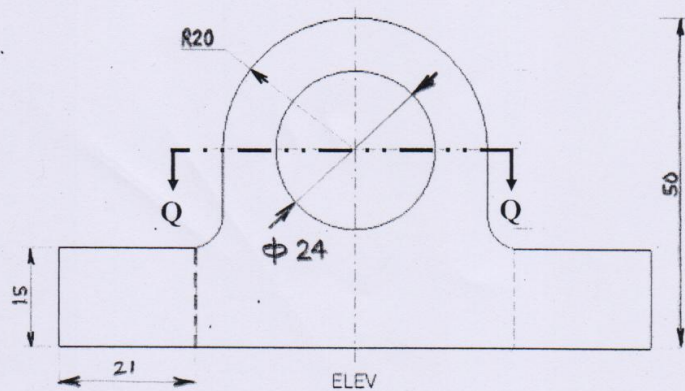
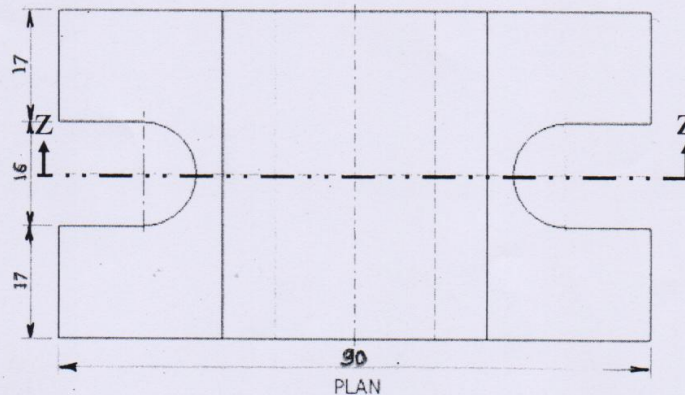


Figure (2)



Good Luck,  
Dr. Ahmed Galal